

LESSON

1.2**Powers *and* Exponents****BEFORE**

You multiplied whole numbers and decimals.

Now

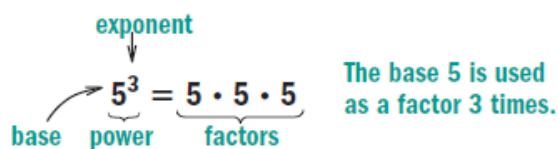
You'll use powers to describe repeated multiplication.

WHY?

So you can find the total number of e-mails sent, as in Ex. 29.

Vocabularypower, p. 10
base, p. 10
exponent, p. 10

A **power** is the result of a repeated multiplication of the same factor. For example, the number 125 is a power because $125 = 5 \cdot 5 \cdot 5$. A power can be written in a form that has two parts: a number called the **base** and a number called the **exponent**. The exponent shows the number of times the base is used as a factor.



5³

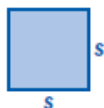
The table shows how to read and write powers. Numbers raised to the first power, such as 12^1 , are usually written without the exponent.

Power	In words	Value
12^1	12 to the first power	$12^1 = 12$
$(0.5)^2$	0.5 to the second power, or 0.5 squared	$(0.5)(0.5) = 0.25$
4^3	4 to the third power, or 4 cubed	$4 \cdot 4 \cdot 4 = 64$
8^4	8 to the fourth power	$8 \cdot 8 \cdot 8 \cdot 8 = 4096$

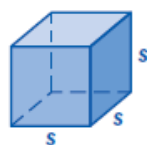
5 · 5 · 5

$(\frac{1}{3})^2$ $\frac{1}{3} \cdot \frac{1}{3}$

Using Formulas A formula describes a relationship between quantities. Some formulas involve powers. For example, you can use a formula to find the area of a square or the volume of a cube.


Area A of a square

$$A = s^2$$

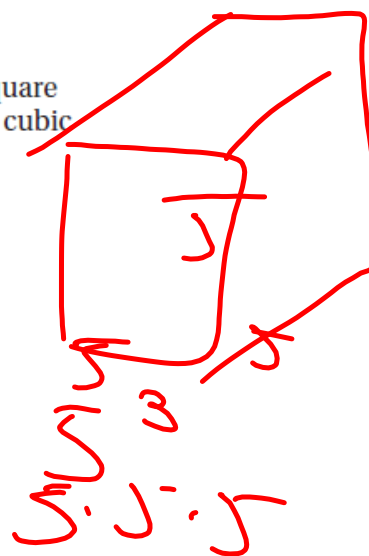
Volume V of a cube

$$V = s^3$$

Area is measured in square units, such as square feet (ft^2) or square centimeters (cm^2). Volume is measured in cubic units, such as cubic inches (in.^3) or cubic meters (m^3).



$$4^2$$



LESSON

1.2

Name _____ Date _____

Practice A

For use with pages 10-13

Write the product using an exponent.

1. $16 \cdot 16 \cdot 16$

2. $18 \cdot 18 \cdot 18 \cdot 18 \cdot 18$

3. $(0.4)(0.4)(0.4)(0.4)$

4. $(1.2)(1.2)$

5. $c \cdot c \cdot c \cdot c \cdot c \cdot c \cdot c$

6. $n \cdot n \cdot n \cdot n \cdot n \cdot n \cdot n \cdot n$

1.2^2

n^8

18^5

Evaluate the expression when $x = 4$ and $y = 0.8$.

7. x^3

10. y^1

$$\begin{array}{r} 8 \\ \cdot 8 \\ \hline 8 \end{array}$$

8. x^4

11. y^4

$$\begin{array}{r} 44 \\ 4 \cdot 4 \cdot 4 \cdot 4 \\ \hline 256 \end{array}$$

9. x^6

12. y^2

$$\begin{array}{r} .8^2 \\ .8 \cdot 8 \\ \hline .64 \end{array}$$

Write the power in words and as a repeated multiplication. Then evaluate the power.

13. 19^2

14. 20^3

15. 0.7^3

16. 2.4^2

20 to the 3rd power
or 20 cubed

20 · 20 · 20

8000

17. 3.2^3

18. 0.6^4

19. 11^4

20. 9^5

$$.6^4$$

.6 to the 4th power

$$.6 \cdot .6 \cdot .6 \cdot .6$$

$$.1296$$

Evaluate the expression when $m = 10$ and $n = 0.12$.

21. m^4

22. m^5

23. m^6

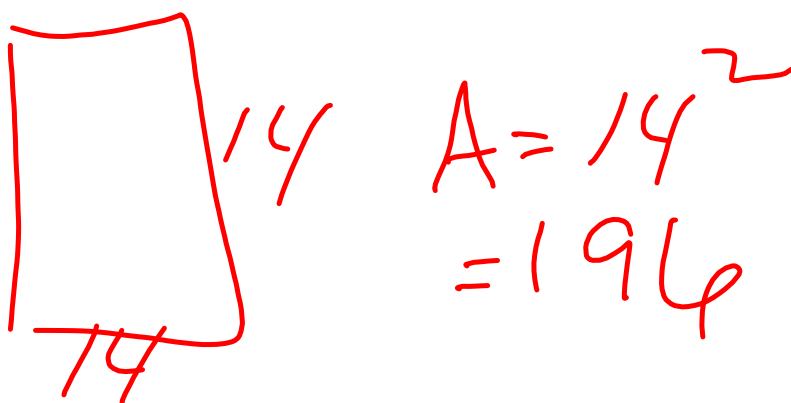
24. n^2

25. n^3

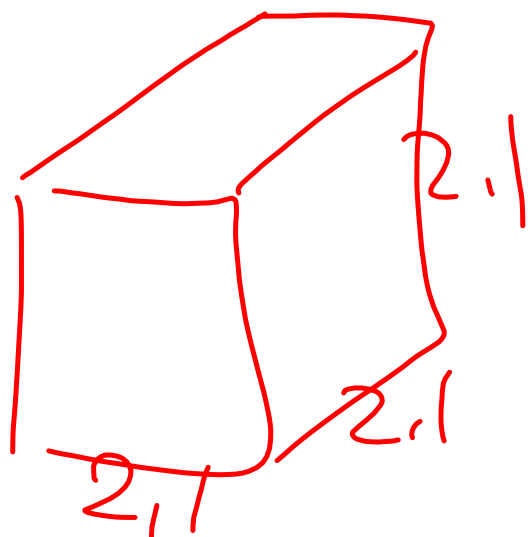
26. n^1

$$\begin{array}{ll} 10^5 & - 12^1 \\ 100,000 & - 12 \end{array}$$

27. Find the area of a square with side length 14 meters.
28. Find the area of a square with side length 2.5 feet.



29. Find the volume of a cube with edge length 2.1 inches.
30. Find the volume of a cube with edge length 6 centimeters.



$$\begin{aligned} V &= s^3 \\ &= 2.1^3 \\ &= 9.261 \end{aligned}$$

31. School has been cancelled for the next day. You call and tell 3 friends the news. Each of your 3 friends calls 3 of their friends. Complete the table. How many calls have been made after stage 8?

Stage	Calls made, as a power	Value of power
1	3^1	3
2	3^2	9
3	? 3^3	? 27
4	? 3^4	? 81



8

$$3^8$$

6561

